

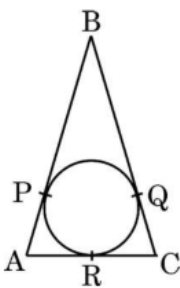
Marking Scheme
Strictly Confidential
(For Internal and Restricted use only)
Secondary School Examination, 2023
MATHEMATICS PAPER CODE 30/5/3

General Instructions: -

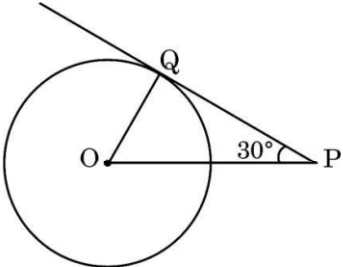
1	You are aware that evaluation is the most important process in the actual and correct assessment of the candidates. A small mistake in evaluation may lead to serious problems which may affect the future of the candidates, education system and teaching profession. To avoid mistakes, it is requested that before starting evaluation, you must read and understand the spot evaluation guidelines carefully.
2	“Evaluation policy is a confidential policy as it is related to the confidentiality of the examinations conducted, Evaluation done and several other aspects. Its’ leakage to public in any manner could lead to derailment of the examination system and affect the life and future of millions of candidates. Sharing this policy/document to anyone, publishing in any magazine and printing in News Paper/Website etc may invite action under various rules of the Board and IPC.”
3	Evaluation is to be done as per instructions provided in the Marking Scheme. It should not be done according to one’s own interpretation or any other consideration. Marking Scheme should be strictly adhered to and religiously followed. However, while evaluating, answers which are based on latest information or knowledge and/or are innovative, they may be assessed for their correctness otherwise and due marks be awarded to them.
4	The Marking scheme carries only suggested value points for the answers. These are in the nature of Guidelines only and do not constitute the complete answer. The students can have their own expression and if the expression is correct, the due marks should be awarded accordingly.
5	The Head-Examiner must go through the first five answer books evaluated by each evaluator on the first day, to ensure that evaluation has been carried out as per the instructions given in the Marking Scheme. If there is any variation, the same should be zero after deliberation and discussion. The remaining answer books meant for evaluation shall be given only after ensuring that there is no significant variation in the marking of individual evaluators.
6	Evaluators will mark (✓) wherever answer is correct. For wrong answer CROSS ‘X’ be marked. Evaluators will not put right (✓) while evaluating which gives an impression that answer is correct and no marks are awarded. This is most common mistake which evaluators are committing.
7	If a question has parts, please award marks on the right-hand side for each part. Marks awarded for different parts of the question should then be totaled up and written in the left-hand margin and encircled. This may be followed strictly.
8	If a question does not have any parts, marks must be awarded in the left-hand margin and encircled. This may also be followed strictly.

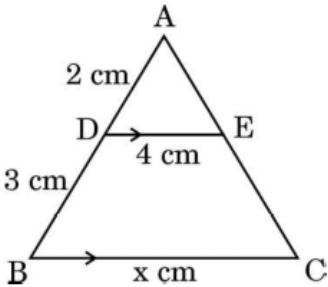
9	<u>In Q1-Q20, if a candidate attempts the question more than once (without canceling the previous attempt), marks shall be awarded for the first attempt only and the other answer scored out with a note “Extra Question”.</u>
10	<u>In Q21-Q38, if a student has attempted an extra question, answer of the question deserving more marks should be retained and the other answer scored out with a note “Extra Question”.</u>
11	No marks to be deducted for the cumulative effect of an error. It should be penalized only once.
12	A full scale of marks _____ (example 0 to 80/70/60/50/40/30 marks as given in Question Paper) has to be used. Please do not hesitate to award full marks if the answer deserves it.
13	Every examiner has to necessarily do evaluation work for full working hours i.e., 8 hours every day and evaluate 20 answer books per day in main subjects and 25 answer books per day in other subjects (Details are given in Spot Guidelines). This is in view of the reduced syllabus and number of questions in question paper.
14	<p>Ensure that you do not make the following common types of errors committed by the Examiner in the past:-</p> <ul style="list-style-type: none"> ● Leaving answer or part thereof unassessed in an answer book. ● Giving more marks for an answer than assigned to it. ● Wrong totaling of marks awarded on an answer. ● Wrong transfer of marks from the inside pages of the answer book to the title page. ● Wrong question wise totaling on the title page. ● Wrong totaling of marks of the two columns on the title page. ● Wrong grand total. ● Marks in words and figures not tallying/not same. ● Wrong transfer of marks from the answer book to online award list. ● Answers marked as correct, but marks not awarded. (Ensure that the right tick mark is correctly and clearly indicated. It should merely be a line. Same is with the X for incorrect answer.) ● Half or a part of answer marked correct and the rest as wrong, but no marks awarded.
15	While evaluating the answer books if the answer is found to be totally incorrect, it should be marked as cross (X) and awarded zero (0) Marks.
16	Any un assessed portion, non-carrying over of marks to the title page, or totaling error detected by the candidate shall damage the prestige of all the personnel engaged in the evaluation work as also of the Board. Hence, in order to uphold the prestige of all concerned, it is again reiterated that the instructions be followed meticulously and judiciously.
17	The Examiners should acquaint themselves with the guidelines given in the “ Guidelines for spot Evaluation ” before starting the actual evaluation.
18	Every Examiner shall also ensure that all the answers are evaluated, marks carried over to the title page, correctly totaled and written in figures and words.
19	The candidates are entitled to obtain photocopy of the Answer Book on request on payment of the prescribed processing fee. All Examiners/Additional Head Examiners/Head Examiners are once again reminded that they must ensure that evaluation is carried out strictly as per value points for each answer as given in the Marking Scheme.

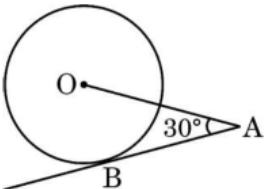
MARKING SCHEME
HEMATICS (Subject Code: 30/5/3)
(PAPER CODE: 30/5/3)

Q. No.	EXPECTED OUTCOMES/VALUE POINTS	Marks
	SECTION A	
	Questions no. 1 to 18 are multiple choice questions (MCQs) and questions number 19 and 20 are Assertion-Reason based questions of 1 mark each	
1.	The distance between the points P $\left(-\frac{11}{3}, 5\right)$ and Q $\left(-\frac{2}{3}, 5\right)$ is : <div style="display: flex; justify-content: space-around;"> (a) 6 units (b) 4 units </div> <div style="display: flex; justify-content: space-around;"> (c) 2 units (d) 3 units </div>	
Sol.	(d) 3 units	1
2.	In the given figure, AB = BC = 10 cm. If AC = 7 cm, then the length of BP is :  <div style="display: flex; justify-content: space-around;"> (a) 3·5 cm (b) 7 cm </div> <div style="display: flex; justify-content: space-around;"> (c) 6·5 cm (d) 5 cm </div>	
Sol.	(c) 6·5 cm	1

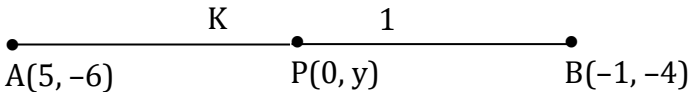
3.	<p>Water in a river which is 3 m deep and 40 m wide is flowing at the rate of 2 km/h. How much water will fall into the sea in 2 minutes ?</p> <p>(a) 800 m³ (b) 4000 m³ (c) 8000 m³ (d) 2000 m³</p>	
Sol.	(c) 8000 m ³	1
4.	<p>If the mean and the mode of a distribution are 15 and 18 respectively, then the median of the distribution is :</p> <p>(a) 17 (b) 15 (c) 16 (d) 18</p>	
Sol.	(c) 16	1
5.	<p>The 11th term from the end of the A.P. : 10, 7, 4,, - 62 is :</p> <p>(a) 25 (b) 16 (c) - 32 (d) 0</p>	
Sol.	(c) - 32	1
6.	<p>One card is drawn at random from a well shuffled pack of 52 playing cards. The probability that the drawn card is a queen, is :</p> <p>(a) $\frac{4}{13}$ (b) $\frac{4}{52}$ (c) $\frac{2}{13}$ (d) $\frac{1}{26}$</p>	
Sol.	(b) $\frac{4}{52}$	1

7.	<p>PQ is tangent to a circle centered at O. If the radius of the circle is 5 cm, then the length of the tangent PQ is :</p>  <p>(a) $5\sqrt{3}$ cm (b) $\frac{10}{\sqrt{3}}$ cm</p> <p>(c) 10 cm (d) $\frac{5}{\sqrt{3}}$ cm</p>	
Sol.	(a) $5\sqrt{3}$ cm	1
8.	<p>Which of the following numbers cannot be the probability of happening of an event ?</p> <p>(a) 0 (b) $\frac{7}{0.01}$</p> <p>(c) 0.07 (d) $\frac{0.07}{3}$</p>	
Sol.	(b) $\frac{7}{0.01}$	1
9.	<p>If $\sec \theta - \tan \theta = \frac{1}{3}$, then the value of $(\sec \theta + \tan \theta)$ is :</p> <p>(a) $\frac{4}{3}$ (b) $\frac{2}{3}$</p> <p>(c) $\frac{1}{3}$ (d) 3</p>	
Sol.	(d) 3	1

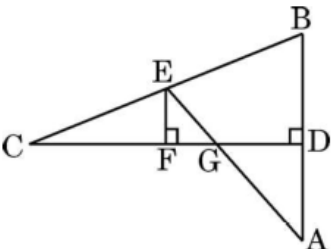
14.	<p>The common difference of the A.P. whose n^{th} term is given by $a_n = 3n + 7$, is :</p> <p>(a) 7 (b) 3 (c) $3n$ (d) 1</p>	
Sol.	(b) 3	1
15.	<p>In the given figure, $DE \parallel BC$. The value of x is :</p>  <p>(a) 6 (b) 12.5 (c) 8 (d) 10</p>	
Sol.	(d) 10	1
16.	<p>In $\triangle ABC$ and $\triangle DEF$, $\frac{AB}{DE} = \frac{BC}{FD}$. Which of the following makes the two triangles similar ?</p> <p>(a) $\angle A = \angle D$ (b) $\angle B = \angle D$ (c) $\angle B = \angle E$ (d) $\angle A = \angle F$</p>	
Sol.	(b) $\angle B = \angle D$	1

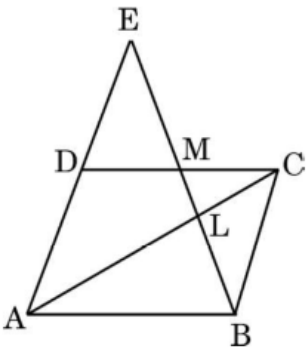
17.	$\left(\frac{2 \tan 30^\circ}{1 + \tan^2 30^\circ} \right)$ is equal to : (a) $\sin 60^\circ$ (b) $\cos 60^\circ$ (c) $\tan 60^\circ$ (d) $\sin 30^\circ$	
Sol.	(a) $\sin 60^\circ$	1
18.	<p>In the given figure, AB is a tangent to the circle centered at O. If $OA = 6$ cm and $\angle OAB = 30^\circ$, then the radius of the circle is :</p>  <p>(a) 3 cm (b) $3\sqrt{3}$ cm (c) 2 cm (d) $\sqrt{3}$ cm</p>	
Sol.	(a) 3 cm	1
	<p><i>Questions number 19 and 20 are Assertion and Reason based questions carrying 1 mark each. Two statements are given, one labelled as Assertion (A) and the other is labelled as Reason (R). Select the correct answer to these questions from the codes (a), (b), (c) and (d) as given below.</i></p> <p>(a) Both Assertion (A) and Reason (R) are true and Reason (R) is the correct explanation of the Assertion (A). (b) Both Assertion (A) and Reason (R) are true, but Reason (R) is not the correct explanation of the Assertion (A). (c) Assertion (A) is true, but Reason (R) is false. (d) Assertion (A) is false, but Reason (R) is true.</p>	

19.	<p><i>Assertion (A) :</i> The number 5^n cannot end with the digit 0, where n is a natural number.</p> <p><i>Reason (R):</i> Prime factorisation of 5 has only two factors, 1 and 5.</p>	
Sol.	(c) Assertion (A) is true, but Reason (R) is false	1
20.	<p><i>Assertion (A) :</i> If the points A(4, 3) and B(x, 5) lie on a circle with centre O(2, 3), then the value of x is 2.</p> <p><i>Reason (R) :</i> Centre of a circle is the mid-point of each chord of the circle.</p>	
Sol.	(c) Assertion (A) is true, but Reason (R) is false	1
<p style="text-align: center;">SECTION B</p> <p>This section comprises of very short answer (VSA) type questions of 2 marks each.</p>		
21.	Find the greatest 3-digit number which is divisible by 18, 24 and 36.	
Sol.	<p>LCM of 18, 24, 36 is 72</p> <p>Required greatest 3-digit number = 936.</p>	<p>1</p> <p>1</p>
22(a).	If $a \cos \theta + b \sin \theta = m$ and $a \sin \theta - b \cos \theta = n$, then prove that $a^2 + b^2 = m^2 + n^2$.	
Sol.	$m^2 + n^2 = (a \cos \theta + b \sin \theta)^2 + (a \sin \theta - b \cos \theta)^2$ $= a^2(\cos^2 \theta + \sin^2 \theta) + b^2(\sin^2 \theta + \cos^2 \theta)$	<p>$\frac{1}{2}$</p> <p>1</p>

	$= a^2 + b^2$	$\frac{1}{2}$
	OR	
22(a).	<p>Prove that :</p> $\sqrt{\frac{\sec A - 1}{\sec A + 1}} + \sqrt{\frac{\sec A + 1}{\sec A - 1}} = 2 \operatorname{cosec} A$	
Sol.	$\text{LHS} = \frac{\sqrt{\sec A - 1}}{\sqrt{\sec A + 1}} + \frac{\sqrt{\sec A + 1}}{\sqrt{\sec A - 1}}$ $= \frac{\sec A - 1 + \sec A + 1}{\sqrt{\sec^2 A - 1}}$ $= \frac{2 \sec A}{\tan A}$ $= 2 \operatorname{cosec} A = \text{RHS}$	$\frac{1}{2}$ $\frac{1}{2}$ $\frac{1}{2}$
23.	Find the ratio in which y-axis divides the line segment joining the points (5, -6) and (-1, -4).	
Sol.	 <p>Let the point of division be P(0, y) which divides AB in the ratio K : 1</p> $0 = \frac{-K + 5}{K + 1} \Rightarrow K = 5$ <p>Ratio is 5:1</p>	$\frac{1}{2}$ $\frac{1}{2}$ $\frac{1}{2}$

24.	Prove that the tangents drawn at the ends of a diameter of a circle are parallel.	
Sol.	<div data-bbox="235 347 651 859" data-label="Image"> </div> <p data-bbox="193 957 935 994">Let PQ and RS be tangents at the end of diameter AB.</p> <p data-bbox="193 1040 510 1077">$\angle PAO = \angle RBO = 90^\circ$</p> <p data-bbox="193 1129 352 1166">$\Rightarrow PQ \parallel RS$</p>	<p data-bbox="1236 476 1341 587">Correct figure 1 Mark</p> <p data-bbox="1236 1031 1264 1068">$\frac{1}{2}$</p> <p data-bbox="1236 1105 1264 1142">$\frac{1}{2}$</p>
25(a).	The line segment joining the points A(4, – 5) and B(4, 5) is divided by the point P such that AP : AB = 2 : 5. Find the coordinates of P.	

26(a).	<p>In the given figure, CD is the perpendicular bisector of AB. EF is perpendicular to CD. AE intersects CD at G. Prove that $\frac{CF}{CD} = \frac{FG}{DG}$.</p> 	
Sol.	<p>$\Delta EFG \sim \Delta ADG$</p> <p>$\Rightarrow \frac{EF}{AD} = \frac{FG}{DG}$ _____ (i)</p> <p>$\Delta EFC \sim \Delta BDC$</p> <p>$\Rightarrow \frac{EF}{BD} = \frac{CF}{CD}$</p> <p>$\Rightarrow \frac{EF}{AD} = \frac{CF}{CD}$ {BD = AD} _____ (ii)</p> <p>Using (i) and (ii)</p> <p>$\frac{FG}{DG} = \frac{CF}{CD}$</p>	<p>1</p> <p>1</p> <p>$\frac{1}{2}$</p> <p>$\frac{1}{2}$</p>
OR		

26(b)	<p>In the given figure, ABCD is a parallelogram. BE bisects CD at M and intersects AC at L. Prove that $EL = 2BL$.</p> 	
Sol.	<p>$\Delta ALE \sim \Delta CLB$</p> $\Rightarrow \frac{AL}{CL} = \frac{EL}{BL} \text{ ————— (i)}$ <p>Also $\Delta CLM \sim \Delta ALB$</p> $\Rightarrow \frac{AL}{CL} = \frac{AB}{CM}$ $\Rightarrow \frac{AL}{CL} = \frac{CD}{CM} \quad \{AB = CD\} \text{ ————— (ii)}$ <p>Using (i) and (ii)</p> $\frac{EL}{BL} = \frac{2CM}{CM}$ $\Rightarrow EL = 2BL$	<p>1</p> <p>1</p> <p>$\frac{1}{2}$</p> <p>$\frac{1}{2}$</p>
27.	<p>A fraction becomes $\frac{1}{3}$ when 1 is subtracted from the numerator. It becomes $\frac{1}{4}$ when 8 is added to the denominator. Find the fraction.</p>	

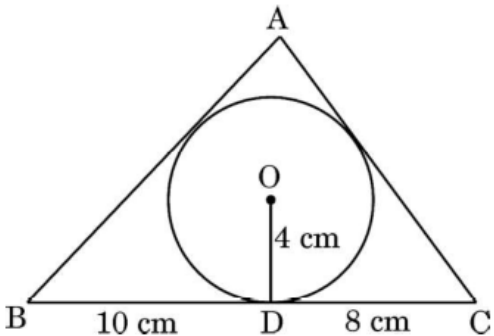
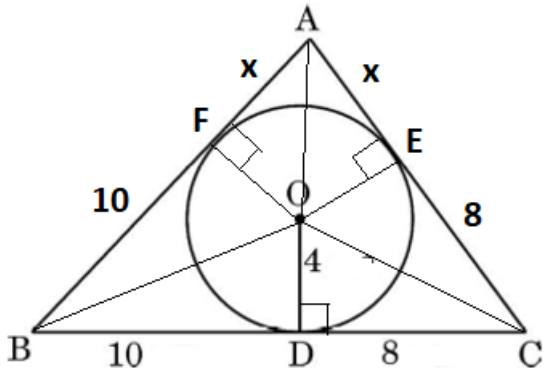
Sol.	<p>Let the fraction be $\frac{x}{y}$</p> $\frac{x-1}{y} = \frac{1}{3} \Rightarrow 3x - y = 3$ $\frac{x}{y+8} = \frac{1}{4} \Rightarrow 4x - y = 8$ <p>Solving to get $x = 5, y = 12$</p> <p>Fraction is $\frac{5}{12}$</p>	<p>1</p> <p>1</p> <p>1</p>
28.	<p>Prove that :</p> $\frac{\tan A}{1 + \sec A} - \frac{\tan A}{1 - \sec A} = 2 \operatorname{cosec} A$	
Sol.	<p>LHS = $\frac{\tan A(1 - \sec A) - \tan A(1 + \sec A)}{1 - \sec^2 A}$</p> $= \frac{-2 \tan A \sec A}{-\tan^2 A}$ $= 2 \times \frac{\cos A}{\sin A} \times \frac{1}{\cos A}$ <p>= 2 cosec A = RHS</p>	<p>1</p> <p>1</p> <p>1</p>

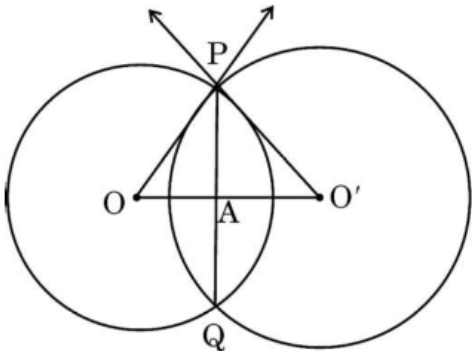
29.	Find the mean of the following frequency distribution :								
	Classes	25 – 30	30 – 35	35 – 40	40 – 45	45 – 50	50 – 55	55 – 60	
	Frequency	14	22	16	6	5	3	4	
Sol.	C.I.	x	f	$u = \frac{x - 42.5}{5}$	fu				For correct table 2 Marks
	25 – 30	27.5	14	- 3	- 42				
	30 – 35	32.5	22	- 2	- 44				
	35 – 40	37.5	16	- 1	- 16				
	40 – 45	42.5	6	0	0				
	45 – 50	47.5	5	1	5				
	50 – 55	52.5	3	2	6				
	55 – 60	57.5	4	3	12				
			70		- 79				
	Mean = $42.5 - \frac{79}{70} \times 5 = 36.86$								1
30(a).	Prove that $\sqrt{3}$ is an irrational number.								
Sol.	Let $\sqrt{3}$ be a rational number.								
	$\therefore \sqrt{3} = \frac{p}{q}$, let p & q be co-primes and q≠0								1/2
	$3q^2 = p^2 \Rightarrow p^2$ is divisible by 3 \Rightarrow p is divisible by 3								
	$\Rightarrow p = 3a$, where ‘a’ is some integer ----- (i)								1
	$9a^2 = 3q^2 \Rightarrow q^2 = 3a^2 \Rightarrow q^2$ is divisible by 3 \Rightarrow q is divisible by 3								
	$\Rightarrow q = 3b$, where ‘b’ is some integer ----- (ii)								1/2
	(i) and (ii) leads to contradiction as ‘p’ and ‘q’ are co-primes.								
	$\therefore \sqrt{3}$ is an irrational number.								1

	OR	
30(b).	The traffic lights at three different road crossings change after every 48 seconds, 72 seconds and 108 seconds respectively. If they change simultaneously at 7 a.m., at what time will they change together next ?	
Sol.	<p>LCM = 432</p> <p>i.e. $\frac{432}{60} = 7 \text{ min } 12 \text{ sec.}$</p> <p>$\Rightarrow$ traffic lights will change simultaneously again at 7 : 7 : 12 a.m.</p>	<p>2</p> <p>1</p>
31.	Find the common difference of an A.P. whose first term is 8, the last term is 65 and the sum of all its terms is 730.	
Sol.	<p>$a = 8, l = 65$</p> <p>$730 = \frac{n}{2} [8 + 65]$</p> <p>$n = \frac{730 \times 2}{73} = 20$</p> <p>$\therefore l = a + 19 d \Rightarrow 65 = 8 + 19 d$</p> <p>$\Rightarrow d = 3$</p>	<p>$\frac{1}{2}$</p> <p>1</p> <p>1</p> <p>$\frac{1}{2}$</p>
	<p>SECTION D</p> <p>This section comprises of long answer (LA) type questions of 5 marks each.</p>	

32(a).	A train travels at a certain average speed for a distance of 54 km and then travels a distance of 63 km at an average speed of 6 km/h more than the first speed. If it takes 3 hours to complete the journey, what was its first average speed ?	
Sol.	<p>Let first average speed of the train be x km/hr.</p> $\frac{54}{x} + \frac{63}{x+6} = 3$ $\Rightarrow 54x + 324 + 63x = 3x^2 + 18x$ $\Rightarrow 3x^2 - 99x - 324 = 0 \text{ or } x^2 - 33x - 108 = 0$ $\Rightarrow (x - 36)(x + 3) = 0$ $\Rightarrow x = 36, -3 \text{ (rejected)}$ <p>Therefore, first average speed of the train was 36 km/hr.</p>	<p>2</p> <p>2</p> <p>1</p>
	OR	
32(b).	Two pipes together can fill a tank in $\frac{15}{8}$ hours. The pipe with larger diameter takes 2 hours less than the pipe with smaller diameter to fill the tank separately. Find the time in which each pipe can fill the tank separately.	
Sol.	<p>Let the time taken by smaller diameter tap be x hrs.</p> <p>Time taken by larger diameter tap is (x – 2) hrs.</p>	

	<p>Therefore $\frac{1}{x-2} + \frac{1}{x} = \frac{8}{15}$</p> <p>$\Rightarrow 15(2x - 2) = 8x(x - 2)$</p> <p>$\Rightarrow 8x^2 - 46x + 30 = 0$</p> <p>$\Rightarrow 4x^2 - 23x + 15 = 0$</p> <p>$\Rightarrow (4x - 3)(x - 5) = 0$</p> <p>$\Rightarrow x = \frac{3}{4}, x = 5$</p> <p>$x \neq \frac{3}{4}$ as $x - 2 < 0$</p> <p>Smaller diameter tap fills in 5 hrs.</p> <p>Larger diameter tap fills in 3 hrs.</p>	<p>2</p> <p>1</p> <p>1</p> <p>1</p>
33.	<p>A horse is tied to a peg at one corner of a square shaped grass field of side 15 m by means of a 5 m long rope. Find the area of that part of the field in which the horse can graze. Also, find the increase in grazing area if length of rope is increased to 10 m. (Use $\pi = 3.14$)</p>	
Sol.	<p>Area of that part of the field in which the horse can graze by means of a 5 m long rope $= \frac{1}{4} \times 3.14 \times (5)^2$</p> <p>$= 19.625 \text{ m}^2$</p> <p>Area of that part of the field in which the horse can graze by means of a 10 m long rope $= \frac{1}{4} \times 3.14 \times (10)^2$</p> <p>$= 78.5 \text{ m}^2$</p>	<p>1</p> <p>1</p> <p>1</p> <p>1</p>

	<p>Increase in grazing area = $78.5 \text{ m}^2 - 19.625 \text{ m}^2 = 58.875 \text{ m}^2$</p>	1
34(a).	<p>A triangle ABC is drawn to circumscribe a circle of radius 4 cm such that the segments BD and DC are of lengths 10 cm and 8 cm respectively. Find the lengths of the sides AB and AC, if it is given that area $\Delta ABC = 90 \text{ cm}^2$.</p> 	
Sol.	 <p>Join OA, OB, OC and draw $OE \perp AC$ and $OF \perp AB$.</p> <p>$BF = 10 \text{ cm}$, $CE = 8 \text{ cm}$, Let $AF = AE = x$</p> <p>$\text{ar } \Delta ABC = \text{ar } \Delta BOC + \text{ar } \Delta COA + \text{ar } \Delta AOB$</p>	$1\frac{1}{2}$ $1\frac{1}{2}$

	$90 = \frac{1}{2} \cdot 4 (BC + CA + AB)$ $90 = 2(18 + 8 + x + 10 + x)$ $90 = 4(18 + x)$ $x = 4.5$ $AB = 14.5 \text{ cm and } AC = 12.5 \text{ cm}$	<p>1</p> <p>1</p>
	OR	
34(b).	<p>Two circles with centres O and O' of radii 6 cm and 8 cm, respectively intersect at two points P and Q such that OP and O'P are tangents to the two circles. Find the length of the common chord PQ.</p> 	
Sol.	$OO' = \sqrt{6^2 + 8^2} = 10 \text{ cm} \quad \{OP \perp O'P\}$ <p>Let $OA = x$, $O'A = 10 - x$</p> $AP^2 = 36 - x^2$	<p>$\frac{1}{2}$</p> <p>$\frac{1}{2}$</p>

	<p>Let PQ and RS be the pillars.</p> <p>$\tan 60^\circ = \sqrt{3} = \frac{h+20}{x} \Rightarrow h+20 = x\sqrt{3}$ _____ (i)</p> <p>$\tan 30^\circ = \frac{1}{\sqrt{3}} = \frac{h}{80-x} \Rightarrow h\sqrt{3} = 80-x$ _____ (ii)</p> <p>Using (i) and (ii) $x = 28.65$, $h = 29.56$</p> <p>AP = 28.65 m, AR = 51.35 m</p> <p>PQ = $h + 20 = 49.56$ m and RS = 29.56 m</p>	<p>1</p> <p>1</p> <p>$\frac{1}{2} + \frac{1}{2}$</p> <p>$\frac{1}{2} + \frac{1}{2}$</p>
	<p>SECTION E</p> <p>This section comprises of 3 case-study based questions of 4 marks each.</p>	

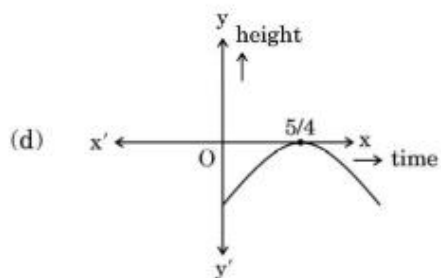
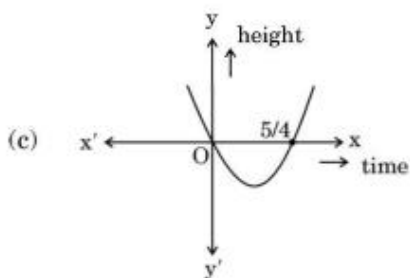
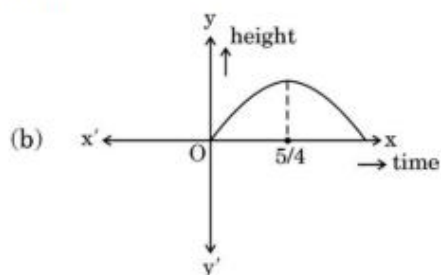
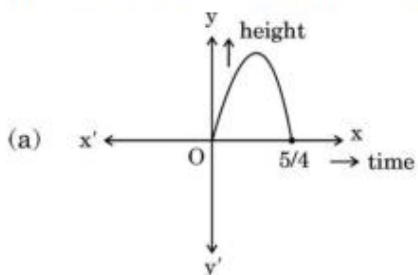
36.

In a pool at an aquarium, a dolphin jumps out of the water travelling at 20 cm per second. Its height above water level after t seconds is given by $h = 20t - 16t^2$.

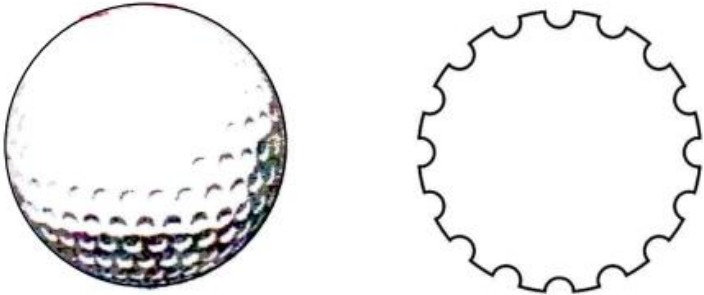


Based on the above, answer the following questions :

- (i) Find zeroes of polynomial $p(t) = 20t - 16t^2$.
- (ii) Which of the following types of graph represents $p(t)$?



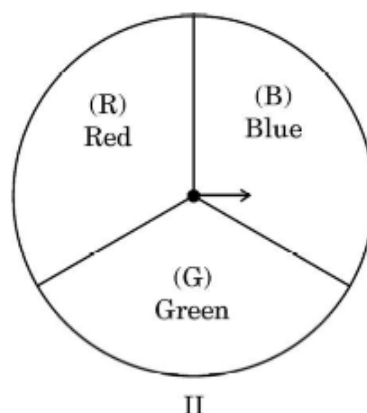
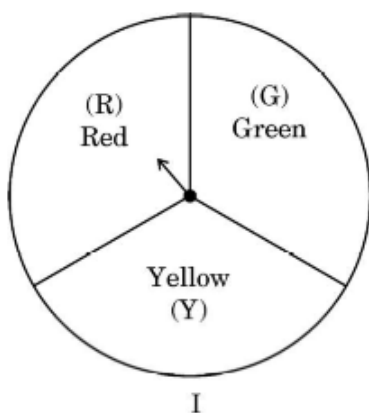
	<p>(iii) (a) What would be the value of h at $t = \frac{3}{2}$? Interpret the result.</p> <p style="text-align: center;">OR</p> <p>(iii) (b) How much distance has the dolphin covered before hitting the water level again ?</p>	
Sol.	<p>(i) $-16t^2 + 20t = 0 \Rightarrow 4t(-4t + 5) = 0$</p> <p>$t = 0, t = \frac{5}{4}$</p> <p>(ii) (a)</p> <p>(iii)(a) At $t = \frac{3}{2}$, $h = -16 \times \frac{9}{4} + 20 \times \frac{3}{2} = -36 + 30 = -6$</p> <p>It means after $\frac{3}{2}$ seconds, dolphin has reached 6 cm below water level.</p> <p style="text-align: center;">OR</p> <p>(iii)(b) Speed of dolphin = 20 cm per second.</p> <p>In one second, distance covered = 20 cm</p>	<p>1</p> <p>1</p> <p>1</p> <p>1</p>

	In $\frac{5}{4}$ seconds, distance covered = $20 \times \frac{5}{4} = 25$ cm	2
37.	<p>A golf ball is spherical with about 300 – 500 dimples that help increase its velocity while in play. Golf balls are traditionally white but available in colours also. In the given figure, a golf ball has diameter 4.2 cm and the surface has 315 dimples (hemi-spherical) of radius 2 mm.</p> <div style="text-align: center;">  </div> <p>Based on the above, answer the following questions :</p> <p>(i) Find the surface area of one such dimple.</p> <p>(ii) Find the volume of the material dug out to make one dimple.</p> <p>(iii) (a) Find the total surface area exposed to the surroundings.</p> <p style="text-align: center;">OR</p> <p>(iii) (b) Find the volume of the golf ball.</p>	
Sol.	<p>(i) $SA = 2\pi r^2 = 2 \times \frac{22}{7} \times 4 = \frac{176}{7} \text{ mm}^2$ or 25.1 mm^2</p> <p>(ii) Volume of material dug out to make one dimple = $\frac{2}{3} \times \frac{22}{7} \times 8$</p>	1

	$= \frac{352}{21} \text{ mm}^3 \text{ or } 16.76 \text{ mm}^3$	1
	<p>(iii)(a) radius of ball = 21 mm</p> <p>Total surface area exposed to surroundings</p>	
	$= 4\pi(21)^2 - 315 \times \pi(2)^2 + 315 \times 2\pi(2)^2$	1
	$= 4 \times \frac{22}{7} \times 21 \times 21 + \frac{22}{7} \times 315 \times 4$	
	$= 9504 \text{ mm}^2$	1
	<p>OR</p>	
	<p>(iii) (b) Volume of the golf ball = $\frac{4}{3}\pi(21)^3 - 315 \times \frac{2}{3}\pi(2)^3$</p>	1
	$= 33528 \text{ mm}^3$	1

38.

A middle school decided to run the following spinner game as a fund-raiser on Christmas Carnival.



Making Purple : Spin each spinner once. Blue and red make purple. So, if one spinner shows Red (R) and another Blue (B), then you 'win'. One such outcome is written as 'RB'.

Based on the above, answer the following questions :

- (i) List all possible outcomes of the game.
- (ii) Find the probability of 'Making Purple'.
- (iii) (a) For each win, a participant gets ₹ 10, but if he/she loses, he/she has to pay ₹ 5 to the school.
If 99 participants played, calculate how much fund could the school have collected.

OR

- (iii) (b) If the same amount of ₹ 5 has been decided for winning or losing the game, then how much fund had been collected by school ? (Number of participants = 99)

Sol.

(i) All possible outcomes : RR, RG, RB, GR, GB, GG, YR, YB, YG

(ii) Number of favourable outcome (RB) = 1

1

<p>P(Making purple) = $\frac{1}{9}$</p> <p>(iii)(a) As P(winning) = $\frac{1}{9}$</p> <p>therefore number of people must win = $\frac{1}{9} \times 99 = 11$</p> <p>$\therefore$ Game lost by 88 persons.</p> <p>Funds collected = $5 \times 88 - 10 \times 11 = ₹ 330$</p> <p>OR</p> <p>(iii)(b) Number of participants = 99</p> <p>P(winning the game) = $\frac{1}{9}$</p> <p>Number of persons won = 11</p> <p>Number of persons lost = 88</p> <p>Funds collected = $88 \times 5 - 11 \times 5 = ₹ 385$</p>	<p>1</p> <p>$\frac{1}{2}$</p> <p>$\frac{1}{2}$</p> <p>1</p> <p>$\frac{1}{2}$</p> <p>$\frac{1}{2}$</p> <p>1</p>
---	---